







helicopter transport.

Worksheet - 10

A. Name -

1. Two means of transport that run on road. ① Car ② Bus
2. Two means of transport that sail on water. ① Ship ② Boat
3. Two means of transport that fly in air. ① Aeroplane, ② Helicopter.

B. Which is faster of the two in each pair ?

1.		<input type="checkbox"/>		<input checked="" type="checkbox"/>
2.		<input type="checkbox"/>		<input checked="" type="checkbox"/>
3.		<input checked="" type="checkbox"/>		<input type="checkbox"/>

C. Fill in the blanks.

1. Cars run on road.
2. Trains run on track.
3. A boat is used to cross a river.
4. An aeroplane is the fastest means of transport.

D. Match the vehicles to the number of wheels.

- | | | |
|--------------------|---|-----------------|
| 1. Boats and ships | • | Two wheels (3) |
| 2. Buses | • | Four wheels (4) |
| 3. Bicycles | • | Six wheels (2) |
| 4. Cars, vans | • | No wheel (1) |

E. Tick ✓ the means of transport you have travelled with.

- | | | | |
|-------------------------------|------------------------------------|---------------------------------------|------------------------------------|
| <input type="checkbox"/> Car | <input type="checkbox"/> Ship | <input type="checkbox"/> Bullock-cart | <input type="checkbox"/> Motorbike |
| <input type="checkbox"/> Bus | <input type="checkbox"/> Tonga | <input type="checkbox"/> Autorickshaw | <input type="checkbox"/> Scooter |
| <input type="checkbox"/> Boat | <input type="checkbox"/> Aeroplane | <input type="checkbox"/> Cyclickshaw | <input type="checkbox"/> Bicycle |

