

Chapter - 5

Our Neighbourhood

Q.1 Fill in the blanks with correct answers

1. We should help our neighbours.

- a) not help b) help c) not talk to

2. Banks are the places where we keep money and costly things

- a) Fire station b) Banks c) ATMs

3. We should not throw waste in and around our neighbourhood.

- a) throw waste b) clean c) plant trees

4. Landmarks help us to find places in a neighbourhood.

- a) Landmarks b) Banks c) Markets

Q.2 Look at the pictures and name them

Ans → 1. Hospital

2. Bank

3. Post office

Q3 Answer in one word -

1. What makes our lives comfortable in a neighbourhood?

Ans → Market

2. What helps us to locate places easily?

Ans → Landmarks

3. How should we act with our neighbours?

Ans → Good and friendly

Q4. Match the following

1. Ice cream — a) Restaurant

2. Meal — b) Ice cream shop

3. Vegetable — c) Bakery

4. Bread — d) Vegetable shop

Q5. Why should we help our neighbours?

Ans → If you help your neighbours selflessly, you're surely going to get help when you will be in trouble.

Words

1. Costly -

2. Pharmacy

3. Landmarks
from

Chapter - 5

Page No.:

Date:

youva

Word meanings.

1. Costly - Something costing a lot of money.
2. Pharmacy - A store that sells medicines
3. Landmarks - Building that you can see clearly from a distance

Chapter - 6

Directions and Time

Q.1. Fill in the blanks with the correct answer.

1. The east is opposite to the west.

- a. north b. east c. south

2. A compass always points to the north.

- a. north b. east c. west

3. South is opposite to the north.

- a. east b. south c. west

4. If you are facing east, then north is on your left.

- a. left b. back c. right

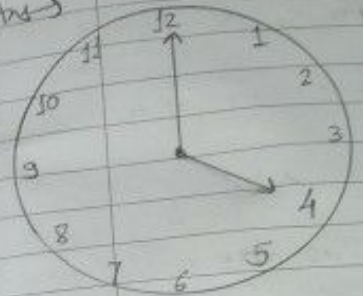
5. A clock has two hands.

- a. four b. two c. five

Q.2. Draw the picture of clock and show the time given below -

- a) 4:00 b.) 10:00 c) 6:00

Ans ->



g) 4:00

Q.3. Answer the following questions.

1. What do you mean by south?

Ans -> Direction

2. Which are the four directions?

Ans -> North, South, East, West

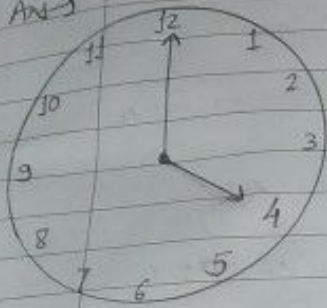
3. What is a clock?

Ans -> A device for measuring and displaying time.

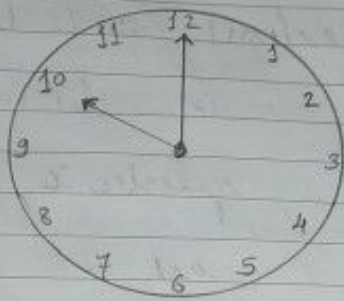
4. If you are facing east, where is north?

Ans -> Right

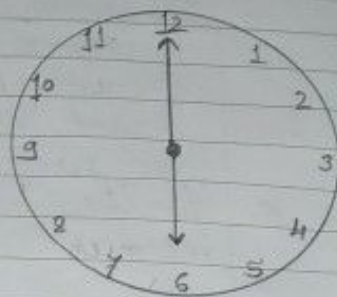
Ans →



a) 4:00



b) 10:00



c) 6:00

Q.3 Answer in one word —

1. What do we call east, west, north and south collectively?

Ans → Directions

2. Which instrument helps us to find directions?

Ans → Compass

3. What tells us the exact time?

Ans → Clock or watch

4. If your compass points to your left, where is the south?

Ans → Right side

5. If your compass points to your friend, where is the east?

Ans) right side

6. If the hour hand is at 12 in clock and the sun is up, what time of the day will it be?

Ans) It will be 12 O'clock.

Q.4 Do the activity from page no. - 39.

Q.5 Name the four main directions.

Ans) East, west, North, South

Word meanings

1. Directions - instructions that tell you how to somewhere.
2. Opposite - located at the end or other side of something.
3. Shadow - a dark area or shape produced by a body coming between rays of light and a surface.

Q.1 Write the seasons that occur in India.

- Ans)
1. Summer
 2. Monsoon
 3. Autumn
 4. Winter
 5. Spring

Q.2 Fill in the blanks.

1. Summer
a) In June, July and August.
2. Monsoon
a) In September, October and November.
3. Winter
a) In December, January and February.