
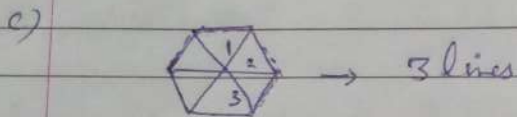
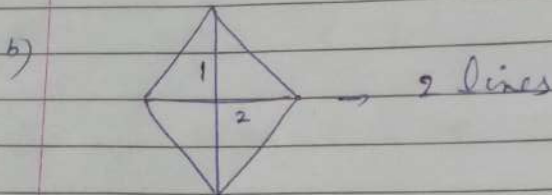




Exercise:- 9<sup>th</sup> A.

(Shapes patterns and nets)

1) Draw the lines of symmetry for these shapes.



2: Look at these flags and say whether they have 0, 1, or 2 lines of symmetry.

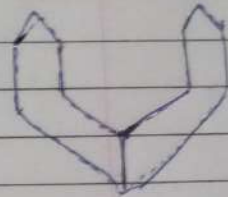
a) 

b) 2

c) 2

d) 2

3): Use a mirror on the red line to draw the reflection of the shapes given below.



4

This question for H.W.